

Stat
5.1 Notes

Properties of a Normal Distribution

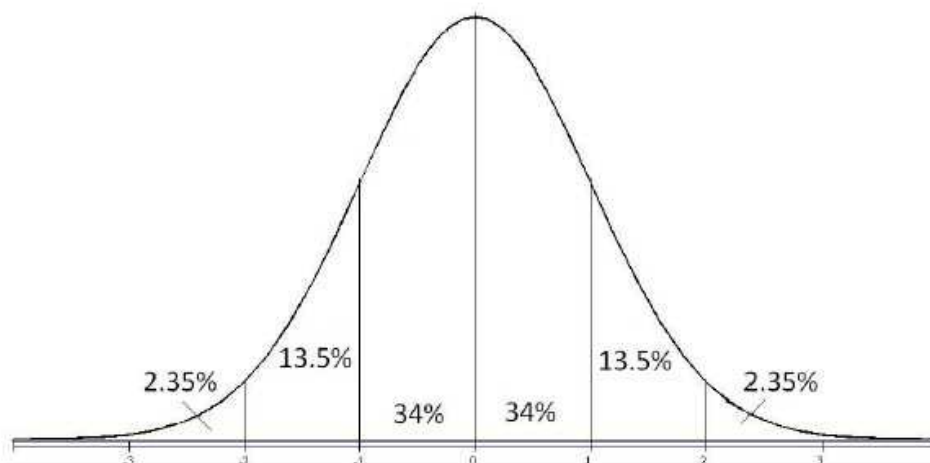
A **normal distribution** is a continuous probability distribution for a random variable x . The graph of a normal distribution is called the **normal curve**. A normal distribution has the following properties.

- The mean, median, and mode are equal.
- The normal curve is bell shaped and is symmetric about the mean.
- The total area under the normal curve is equal to one.
- The normal curve approaches, but never touches, the x -axis as it extends farther and farther away from the mean.
- Between $\mu - \sigma$ and $\mu + \sigma$ (in the center of the curve) the graph curves downward. The graph curves upward to the left of $\mu - \sigma$ and to the right of $\mu + \sigma$. The points at which the curve changes from curving upwards to curving downward are called *inflection points*.

*Empirical Rule:

In a normal distribution with mean μ and standard deviation σ , you can approximate areas under the normal curve as follows.

- About 68% of the area lies between $\mu - \sigma$ and $\mu + \sigma$.
- About 95% of the area lies between $\mu - 2\sigma$ and $\mu + 2\sigma$.
- About 99.7% of the area lies between $\mu - 3\sigma$ and $\mu + 3\sigma$.



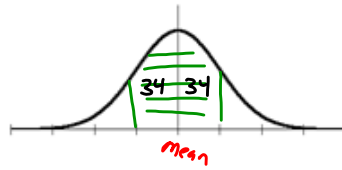
Example One: Adult IQ scores are normally distributed with $\mu = 100$ and $\sigma = 15$.

- Estimate the probability that a randomly chosen adult has an IQ between 70 and 115.
- Estimate the probability that a randomly chosen adult has an IQ between 85 and 145.

Empirical Rule (or 68-95-99.7 Rule)

For data with a (symmetrical) bell-shaped distribution, the standard deviation has the following characteristics.

1. About 68% of the data lies within 1 σ of the μ .



2. About 95% of the data lies within 2 σ of the μ .



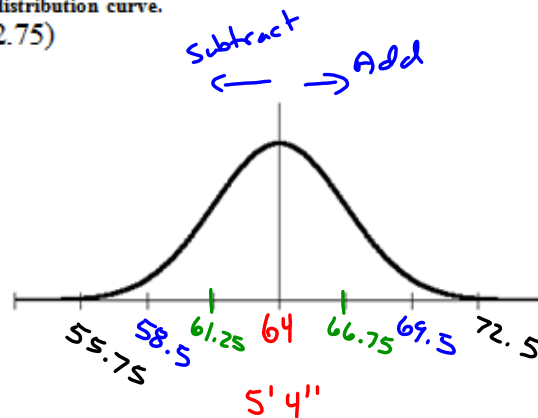
3. About 99.7% of the data lies within 3 σ of the μ .



Example:

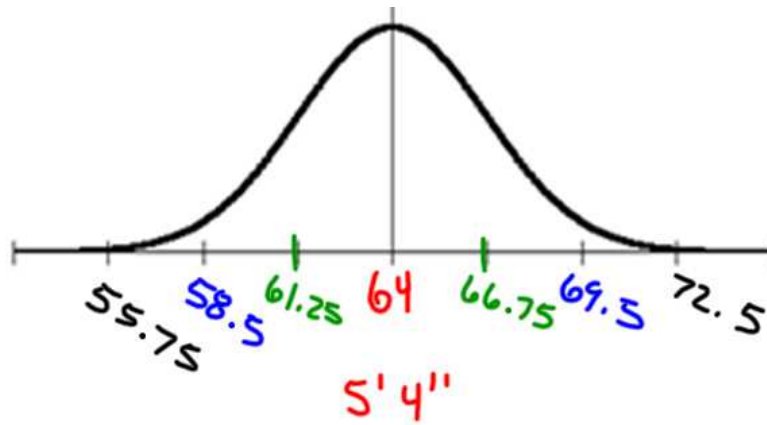
Suppose you are given that the mean height of American women (ages 20 – 29) was 64 inches with a standard deviation of 2.75 inches. Draw and label the bell-shaped (normal) distribution curve.

$N(64, 2.75)$



Use the labeled curve to answer the following questions:

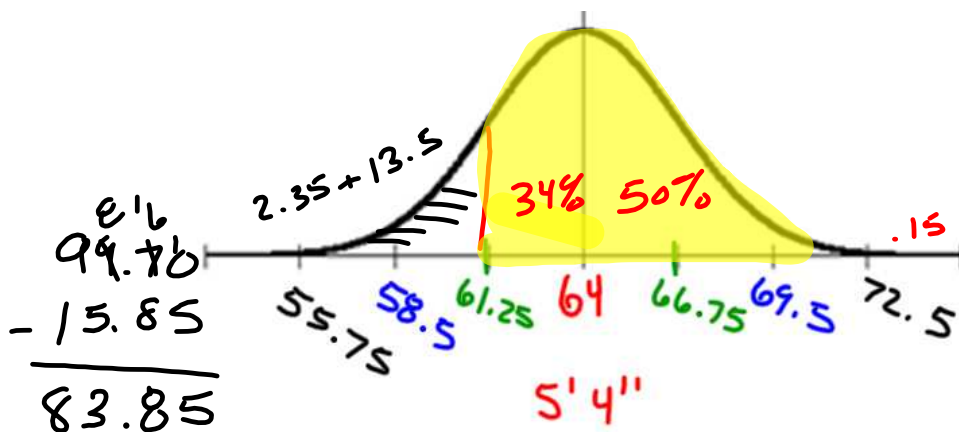
1. Estimate the percent of the women whose height are between 61.25 inches and 69.5 inches.
2. Estimate the percent of the women whose height are above 61.25 inches.
3. Estimate the percent of the women whose height are below 58.5 inches.
4. Estimate the percent of the women whose height is either below 61.25 inches OR above 69.5 inches.



Use the labeled curve to answer the following questions:

1. Estimate the percent of the women whose height are between 61.25 inches and 69.5 inches.
2. Estimate the percent of the women whose height are above 61.25 inches.
3. Estimate the percent of the women whose height are below 58.5 inches.
4. Estimate the percent of the women whose height is either below 61.25 inches OR above 69.5 inches.

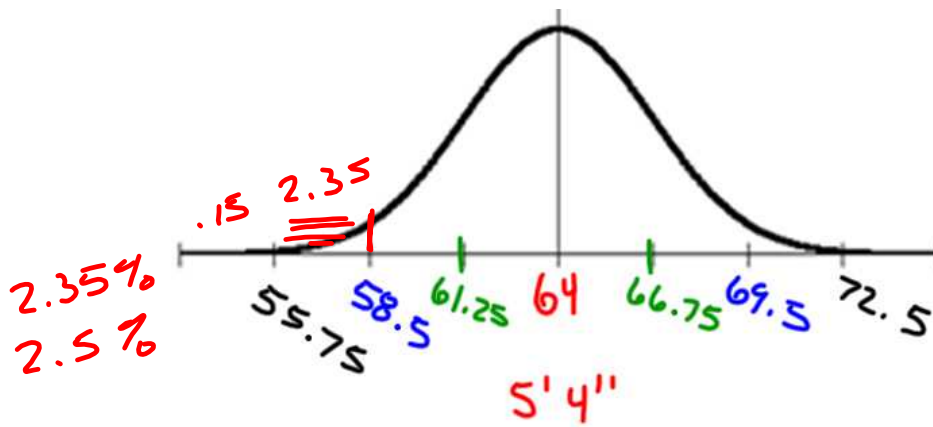
81.5



Use the labeled curve to answer the following questions:

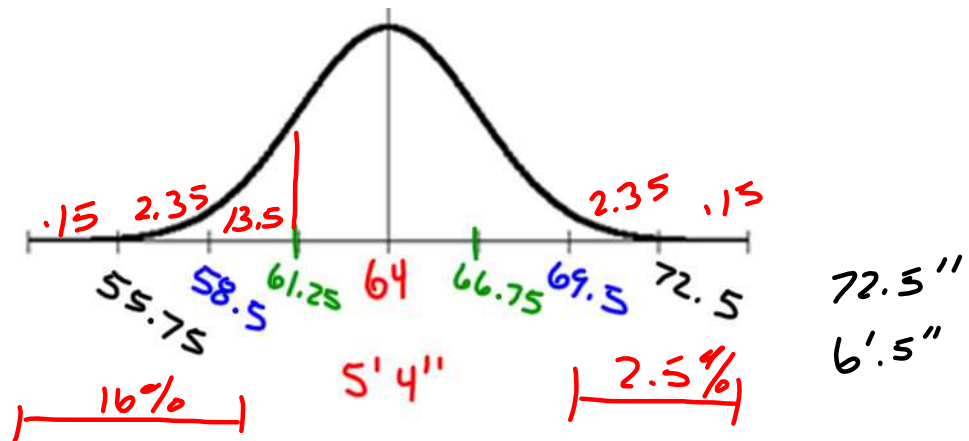
1. Estimate the percent of the women whose height are between 61.25 inches and 69.5 inches.
2. Estimate the percent of the women whose height are above 61.25 inches.
3. Estimate the percent of the women whose height are below 58.5 inches.
4. Estimate the percent of the women whose height is either below 61.25 inches OR above 69.5 inches.

~~84%~~ 83.85%



Use the labeled curve to answer the following questions:

1. Estimate the percent of the women whose height are between 61.25 inches and 69.5 inches.
2. Estimate the percent of the women whose height are above 61.25 inches.
3. Estimate the percent of the women whose height are below 58.5 inches.
4. Estimate the percent of the women whose height is either below 61.25 inches OR above 69.5 inches.



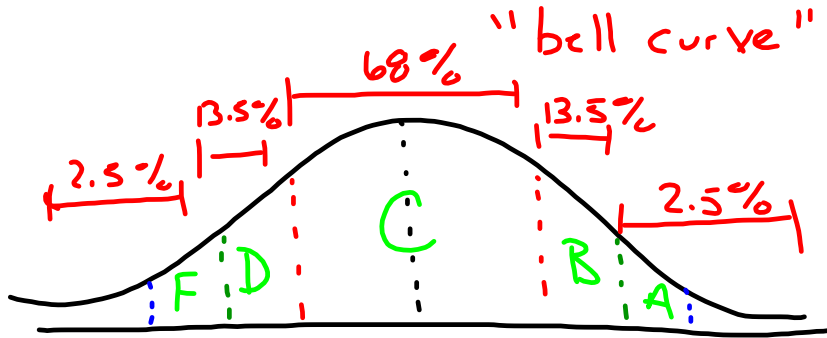
Use the labeled curve to answer the following questions:

1. Estimate the percent of the women whose height are between 61.25 inches and 69.5 inches.
2. Estimate the percent of the women whose height are above 61.25 inches.
3. Estimate the percent of the women whose height are below 58.5 inches.
4. Estimate the percent of the women whose height is either below 61.25 inches OR above 69.5 inches.

A. Properties of a Normal Distribution

A normal distribution is a continuous probability for a random variable x .

The graph of a normal distribution is called the normal curve.



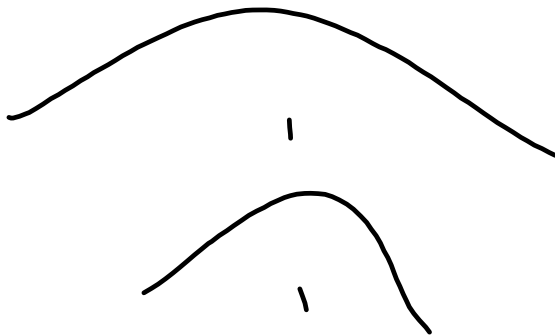
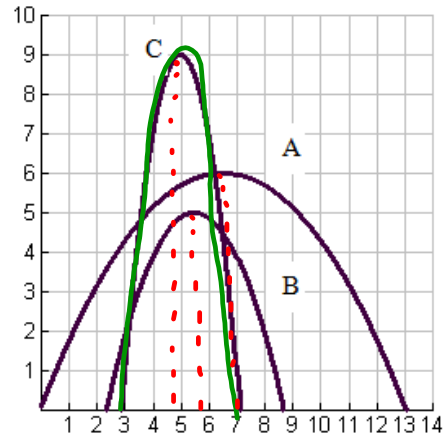
List the first four properties of a normal distribution:

- 1.
- 2.
- 3.
- 4.

Example 1:

Using the graphs given, identify which curve has:

- a. the greatest mean **A**
- b. the lowest mean **C**
- c. the greatest standard deviation **A**
- d. the lowest standard deviation **C**



B. The Standard Normal Distribution

The **standard score**, or z, represents _____.

To transform the random variable to a z-score, use the following formula:

$$z = \frac{\text{Value} - \text{Mean}}{\text{Standard deviation}} = \frac{x - \mu}{\sigma}$$

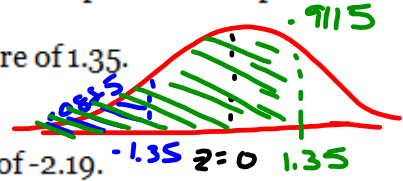
It is important to know the difference between x and z . The random variable x is called a _____ and represents _____, while z represents _____.

Using the Standard Normal Table (pages A16 and A17)

Examples:

For each of the examples below, sketch the picture that corresponds to the problem.

1. Find the cumulative area that corresponds to a z-score of 1.35.



2. Find the area under the curve to the left of a z-score of -2.19.

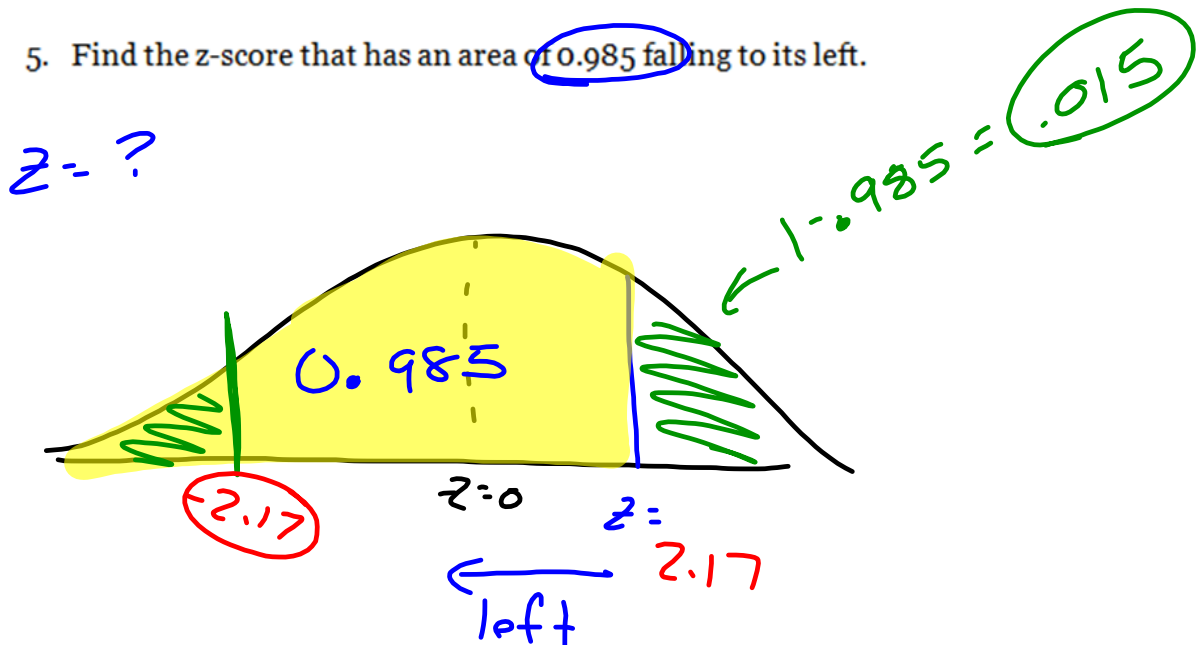
3. Find the area under the curve to the right of a z-score of 0.52.

4. Find the z-score that corresponds to a cumulative area of 0.1711

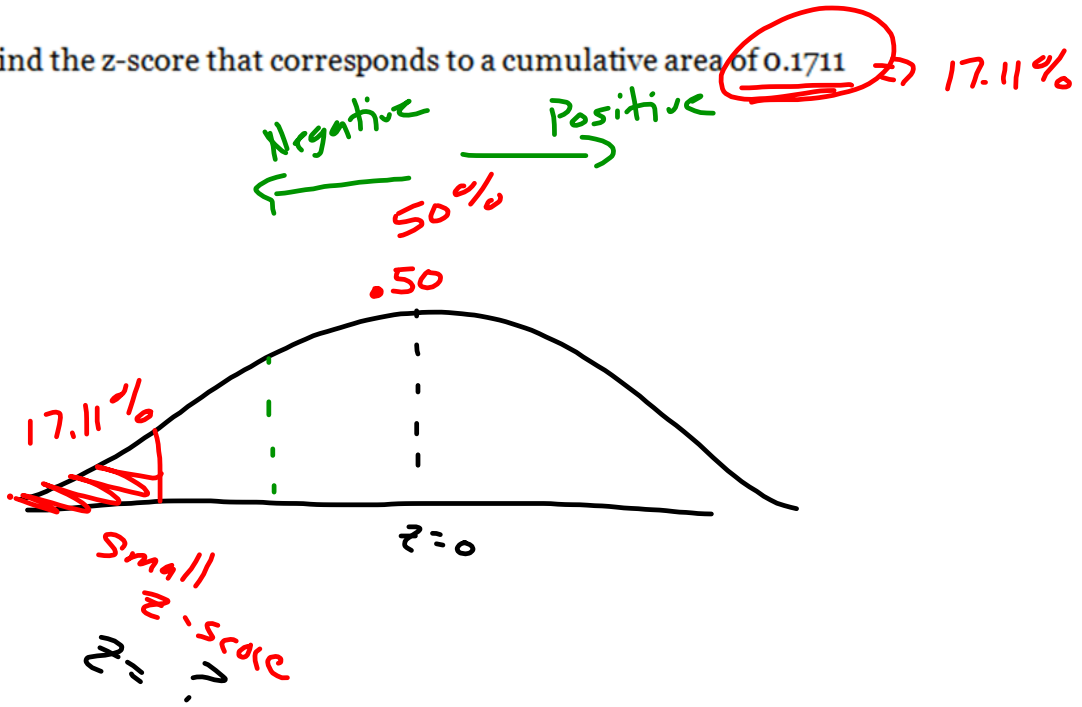
5. Find the z-score that has an area of 0.985 falling to its left.

6. Find the z-score that has an area of falling 0.0024 to its right.

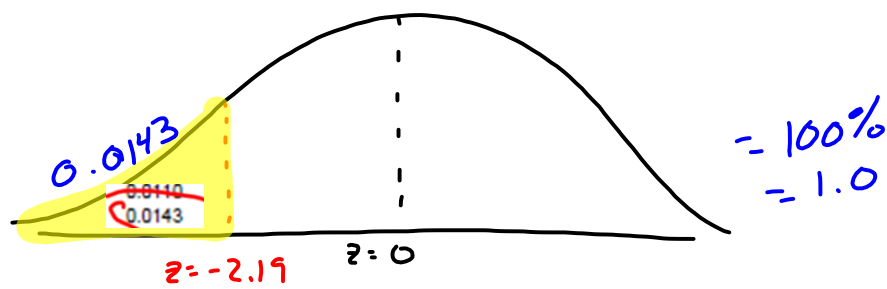
5. Find the z-score that has an area of 0.985 falling to its left.



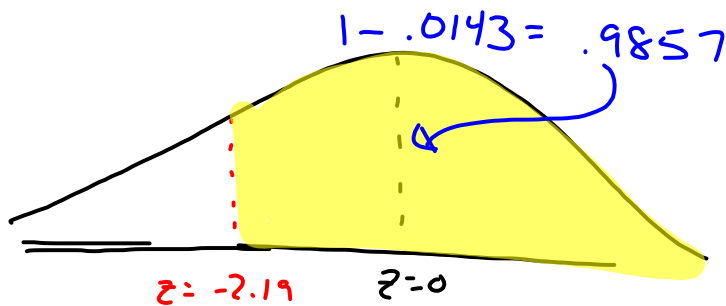
4. Find the z-score that corresponds to a cumulative area of 0.1711 \Rightarrow 17.11%

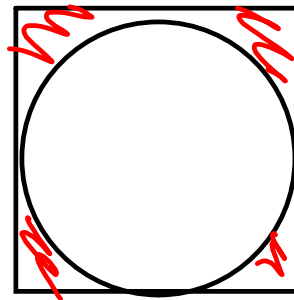
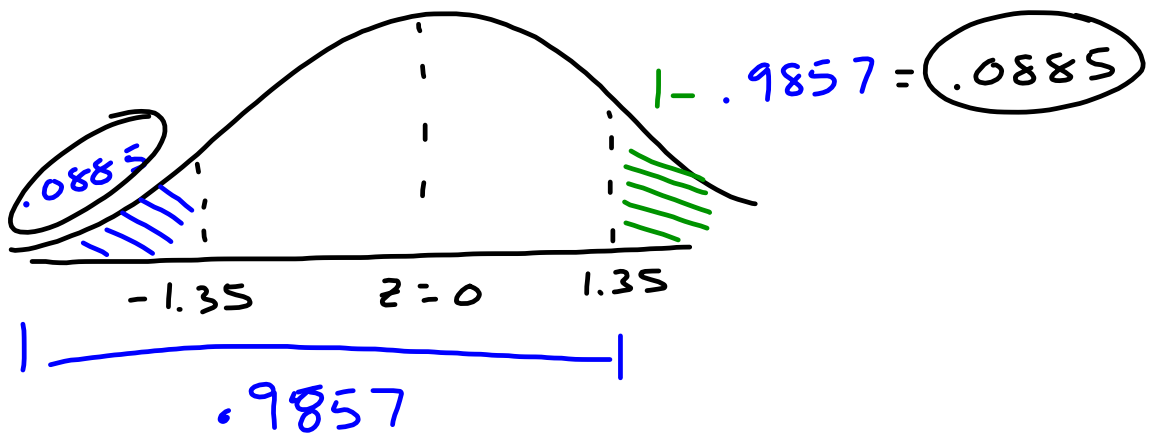


2. Find the area under the curve to the left of a z-score of -2.19.



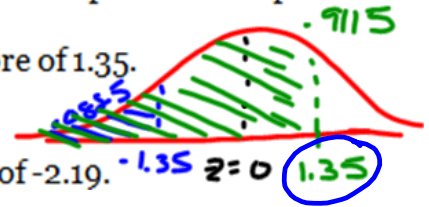
* area to the right.



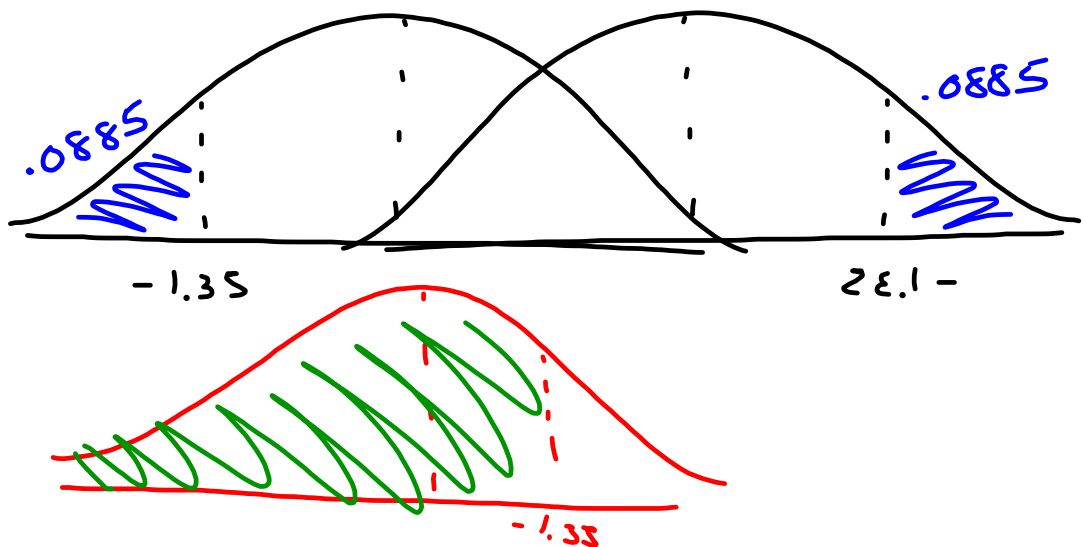


For each of the examples below, sketch the picture that corresponds to the problem.

1. Find the cumulative area that corresponds to a z-score of 1.35.



2. Find the area under the curve to the left of a z-score of -2.19.



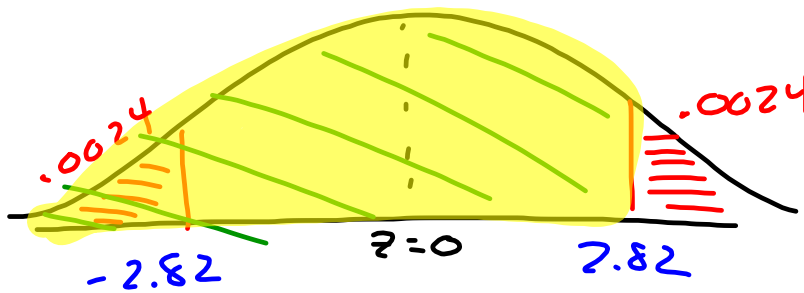
z	0.00	0.01	0.02	0.03	0.04	0.05	0.06	0.07	0.08	0.09
-3.4	0.0003	0.0003	0.0003	0.0003	0.0003	0.0003	0.0003	0.0003	0.0003	0.0002
-3.3	0.0005	0.0005	0.0005	0.0004	0.0004	0.0004	0.0004	0.0004	0.0004	0.0003
-3.2	0.0007	0.0007	0.0006	0.0006	0.0006	0.0006	0.0006	0.0005	0.0005	0.0005
-3.1	0.0010	0.0009	0.0009	0.0009	0.0008	0.0008	0.0008	0.0008	0.0007	0.0007
-3.0	0.0013	0.0013	0.0013	0.0012	0.0012	0.0011	0.0011	0.0011	0.0010	0.0010
-2.9	0.0019	0.0018	0.0018	0.0017	0.0016	0.0016	0.0015	0.0015	0.0014	0.0014
-2.8	0.0026	0.0025	0.0024	0.0023	0.0023	0.0022	0.0021	0.0021	0.0020	0.0019
-2.7	0.0035	0.0034	0.0033	0.0032	0.0031	0.0030	0.0029	0.0028	0.0027	0.0026
-2.6	0.0047	0.0045	0.0044	0.0043	0.0041	0.0040	0.0039	0.0038	0.0037	0.0036
-2.5	0.0062	0.0060	0.0059	0.0057	0.0055	0.0054	0.0052	0.0051	0.0049	0.0048
-2.4	0.0082	0.0080	0.0078	0.0075	0.0073	0.0071	0.0069	0.0068	0.0066	0.0064
-2.3	0.0107	0.0104	0.0102	0.0099	0.0096	0.0094	0.0091	0.0089	0.0087	0.0084
-2.2	0.0139	0.0136	0.0132	0.0129	0.0125	0.0122	0.0119	0.0116	0.0113	0.0110
-2.1	0.0179	0.0174	0.0170	0.0166	0.0162	0.0158	0.0154	0.0150	0.0146	0.0143
-2.0	0.0228	0.0222	0.0217	0.0212	0.0207	0.0202	0.0197	0.0192	0.0188	0.0183
-1.9	0.0287	0.0281	0.0274	0.0268	0.0262	0.0256	0.0250	0.0244	0.0239	0.0233
-1.8	0.0359	0.0351	0.0344	0.0336	0.0329	0.0322	0.0314	0.0307	0.0301	0.0294
-1.7	0.0446	0.0436	0.0427	0.0418	0.0409	0.0401	0.0392	0.0384	0.0375	0.0367
-1.6	0.0548	0.0537	0.0526	0.0516	0.0505	0.0495	0.0485	0.0475	0.0465	0.0455
-1.5	0.0668	0.0655	0.0643	0.0630	0.0618	0.0606	0.0594	0.0582	0.0571	0.0559
-1.4	0.0808	0.0793	0.0778	0.0764	0.0749	0.0735	0.0721	0.0708	0.0694	0.0681
-1.3	0.0968	0.0951	0.0934	0.0918	0.0901	0.0885	0.0869	0.0853	0.0838	0.0823
-1.2	0.1151	0.1131	0.1112	0.1093	0.1075	0.1056	0.1038	0.1020	0.1003	0.0985
-1.1	0.1357	0.1335	0.1314	0.1292	0.1271	0.1251	0.1230	0.1210	0.1190	0.1170
-1.0	0.1587	0.1562	0.1539	0.1515	0.1492	0.1469	0.1446	0.1423	0.1401	0.1379
-0.9	0.1841	0.1814	0.1788	0.1762	0.1736	0.1711	0.1685	0.1660	0.1635	0.1611
-0.8	0.2119	0.2090	0.2061	0.2033	0.2005	0.1977	0.1949	0.1922	0.1894	0.1867
-0.7	0.2420	0.2389	0.2358	0.2327	0.2296	0.2266	0.2236	0.2206	0.2177	0.2148
-0.6	0.2743	0.2709	0.2676	0.2643	0.2611	0.2578	0.2546	0.2514	0.2483	0.2451
-0.5	0.3085	0.3050	0.3015	0.2981	0.2946	0.2912	0.2877	0.2843	0.2810	0.2776
-0.4	0.3446	0.3409	0.3372	0.3336	0.3300	0.3264	0.3228	0.3192	0.3156	0.3121
-0.3	0.3821	0.3783	0.3745	0.3707	0.3669	0.3632	0.3594	0.3557	0.3520	0.3483
-0.2	0.4207	0.4168	0.4129	0.4090	0.4052	0.4013	0.3974	0.3936	0.3897	0.3859
-0.1	0.4602	0.4562	0.4522	0.4483	0.4443	0.4404	0.4364	0.4325	0.4286	0.4247
0.0	0.5000	0.4960	0.4920	0.4880	0.4840	0.4801	0.4761	0.4721	0.4681	0.4641

z	0.00	0.01	0.02	0.03	0.04	0.05	0.06	0.07	0.08	0.09
0.0	0.5000	0.5040	0.5080	0.5120	0.5160	0.5199	0.5239	0.5279	0.5319	0.5359
0.1	0.5398	0.5438	0.5478	0.5517	0.5557	0.5596	0.5636	0.5675	0.5714	0.5753
0.2	0.5793	0.5832	0.5871	0.5910	0.5948	0.5987	0.6026	0.6064	0.6103	0.6141
0.3	0.6179	0.6217	0.6255	0.6293	0.6331	0.6368	0.6406	0.6443	0.6480	0.6517
0.4	0.6554	0.6591	0.6628	0.6664	0.6700	0.6736	0.6772	0.6808	0.6844	0.6879
0.5	0.6915	0.6950	0.6985	0.7019	0.7054	0.7088	0.7123	0.7157	0.7190	0.7224
0.6	0.7257	0.7291	0.7324	0.7357	0.7389	0.7422	0.7454	0.7486	0.7517	0.7549
0.7	0.7580	0.7611	0.7642	0.7673	0.7704	0.7734	0.7764	0.7794	0.7823	0.7852
0.8	0.7881	0.7910	0.7939	0.7967	0.7995	0.8023	0.8051	0.8078	0.8106	0.8133
0.9	0.8159	0.8186	0.8212	0.8238	0.8264	0.8289	0.8315	0.8340	0.8365	0.8389
1.0	0.8413	0.8438	0.8461	0.8485	0.8508	0.8531	0.8554	0.8577	0.8599	0.8621
1.1	0.8643	0.8665	0.8686	0.8708	0.8729	0.8749	0.8770	0.8790	0.8810	0.8830
1.2	0.8849	0.8869	0.8888	0.8907	0.8925	0.8944	0.8962	0.8980	0.8997	0.9015
1.3	0.9032	0.9049	0.9066	0.9082	0.9099	0.9115	0.9131	0.9147	0.9162	0.9177
1.4	0.9192	0.9207	0.9222	0.9236	0.9251	0.9265	0.9279	0.9292	0.9306	0.9319
1.5	0.9332	0.9345	0.9357	0.9370	0.9382	0.9394	0.9406	0.9418	0.9429	0.9441
1.6	0.9452	0.9463	0.9474	0.9484	0.9495	0.9505	0.9515	0.9525	0.9535	0.9545
1.7	0.9554	0.9564	0.9573	0.9582	0.9591	0.9599	0.9608	0.9616	0.9625	0.9633
1.8	0.9641	0.9649	0.9656	0.9664	0.9671	0.9678	0.9686	0.9693	0.9699	0.9706
1.9	0.9713	0.9719	0.9726	0.9732	0.9738	0.9744	0.9750	0.9756	0.9761	0.9767
2.0	0.9772	0.9778	0.9783	0.9788	0.9793	0.9798	0.9803	0.9808	0.9812	0.9817
2.1	0.9821	0.9826	0.9830	0.9834	0.9838	0.9842	0.9846	0.9850	0.9854	0.9857
2.2	0.9861	0.9864	0.9868	0.9871	0.9875	0.9878	0.9881	0.9884	0.9887	0.9890
2.3	0.9893	0.9896	0.9898	0.9901	0.9904	0.9906	0.9909	0.9911	0.9913	0.9916
2.4	0.9918	0.9920	0.9922	0.9925	0.9927	0.9929	0.9931	0.9932	0.9934	0.9936
2.5	0.9938	0.9940	0.9941	0.9943	0.9945	0.9946	0.9948	0.9949	0.9951	0.9952
2.6	0.9953	0.9955	0.9956	0.9957	0.9959	0.9960	0.9961	0.9962	0.9963	0.9964
2.7	0.9965	0.9966	0.9967	0.9968	0.9969	0.9970	0.9971	0.9972	0.9973	0.9974
2.8	0.9974	0.9975	0.9976	0.9977	0.9977	0.9978	0.9979	0.9979	0.9980	0.9981
2.9	0.9981	0.9982	0.9982	0.9983	0.9984	0.9984	0.9985	0.9985	0.9986	0.9986
3.0	0.9987	0.9987	0.9987	0.9988	0.9988	0.9989	0.9989	0.9989	0.9990	0.9990
3.1	0.9990	0.9991	0.9991	0.9991	0.9992	0.9992	0.9992	0.9992	0.9993	0.9993
3.2	0.9993	0.9993	0.9994	0.9994	0.9994	0.9994	0.9994	0.9995	0.9995	0.9995
3.3	0.9995	0.9995	0.9995	0.9996	0.9996	0.9996	0.9996	0.9996	0.9996	0.9997
3.4	0.9997	0.9997	0.9997	0.9997	0.9997	0.9997	0.9997	0.9997	0.9997	0.9998

5. Find the z-score that has an area of 0.985 falling to its left.
6. Find the z-score that has an area of falling 0.0024 to its right.
7. Find the area under the standard normal curve between $z = -1.5$ and $z = 1.25$.
8. Find the area under the standard normal curve between $z = -2.16$ and $z = -1.35$.

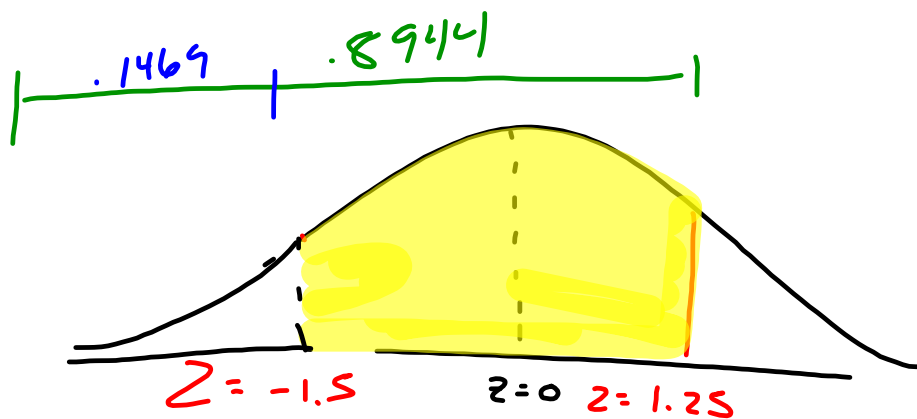
Assignment: new: pgs 249 – 252/ 15, 16, 17 – 20, 21 – 39 odd, 53 – 54, 57, 61

6. Find the z-score that has an area of falling 0.0024 to its right.



$$1 - .0024 = .9976$$

7. Find the area under the standard normal curve between $z = -1.5$ and $z = 1.25$.



$$.8944 - .1469 = .7475$$