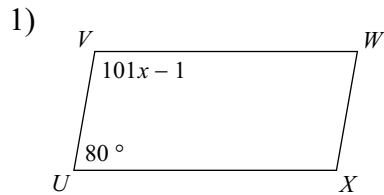
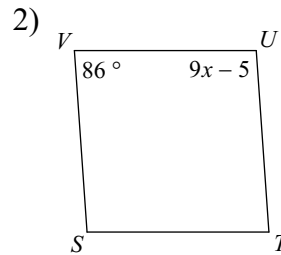


Unit 1 - Parallelograms

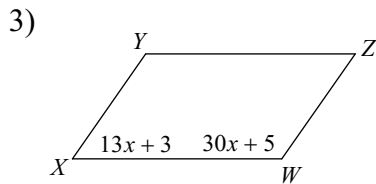
Solve for  $x$ . Each figure is a parallelogram.



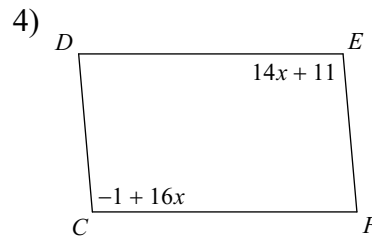
- A) 12      B) 2
- C) 1        D) 9



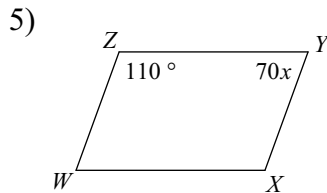
- A) 2        B) 6
- C) 5        D) 11



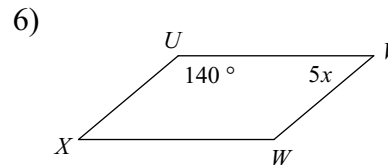
- A) 8        B) 4
- C) 0        D) 6



- A) 6        B) 5
- C) 11      D) 9



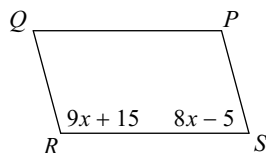
- A) 6        B) 12
- C) 1        D) 3



- A) 8        B) 3
- C) 0        D) 10

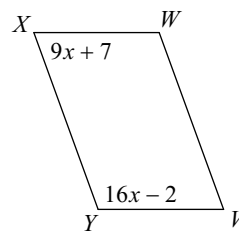
Find the measurement indicated in each parallelogram.

7) Find  $m\angle Q$



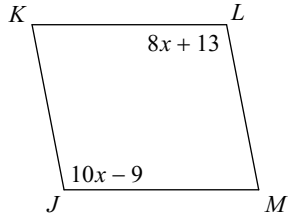
- A)  $40^\circ$       B)  $90^\circ$
- C)  $55^\circ$       D)  $75^\circ$

8) Find  $m\angle V$



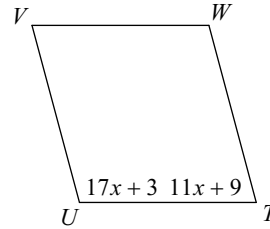
- A)  $113^\circ$       B)  $70^\circ$
- C)  $48^\circ$         D)  $55^\circ$

9) Find  $m\angle J$



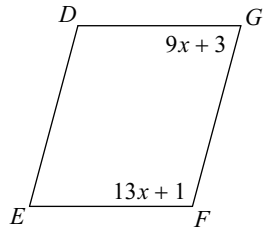
- A)  $101^\circ$       B)  $90^\circ$   
C)  $138^\circ$       D)  $140^\circ$

10) Find  $m\angle U$



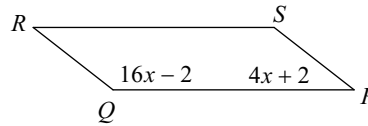
- A)  $45^\circ$       B)  $105^\circ$   
C)  $55^\circ$       D)  $35^\circ$

11) Find  $m\angle F$



- A)  $110^\circ$       B)  $80^\circ$   
C)  $100^\circ$       D)  $105^\circ$

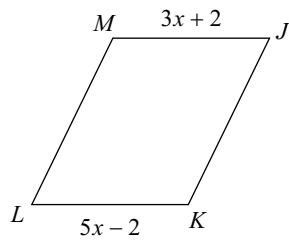
12) Find  $m\angle S$



- A)  $86^\circ$       B)  $142^\circ$   
C)  $115^\circ$       D)  $135^\circ$

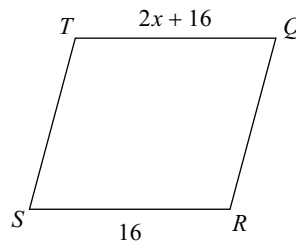
**Solve for  $x$ . Each figure is a parallelogram.**

13)



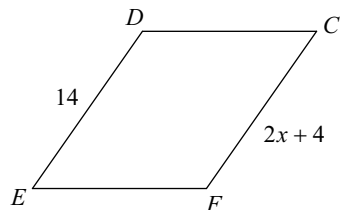
- A) 1      B) 12  
C) 7      D) 2

14)



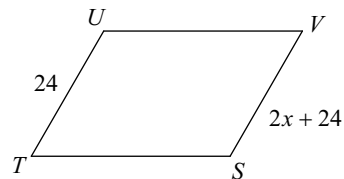
- A) 0      B) 2  
C) 5      D) 11

15)



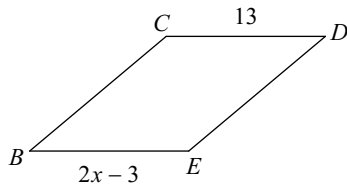
- A) 12      B) 10  
C) 1      D) 5

16)



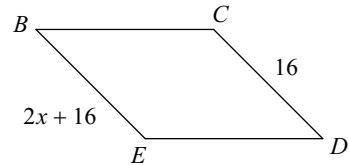
- A) 10      B) 0  
C) 12      D) 8

17)



- A) 3      B) 5  
C) 9      D) 8

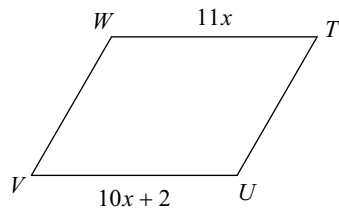
18)



- A) 6      B) 4  
C) 0      D) 9

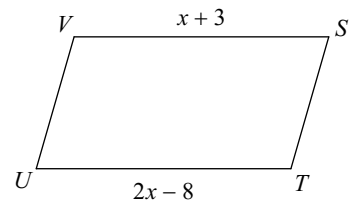
**Find the measurement indicated in each parallelogram.**

19) Find  $UV$



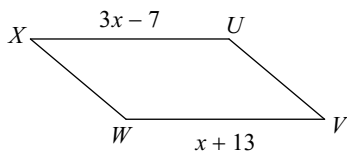
- A) 22      B) 19  
C) 11      D) 8

20) Find  $TU$



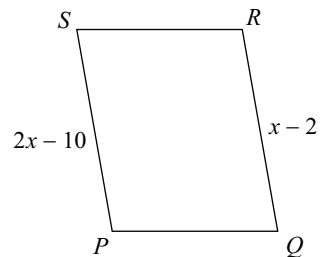
- A) 20      B) 14  
C) 7      D) 21

21) Find  $VW$



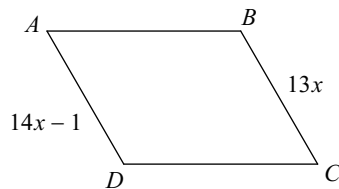
- A) 8      B) 12  
C) 23      D) 9

22) Find  $RQ$




- A) 8      B) 6  
C) 15      D) 22

23) Find  $BC$



- A) 13      B) 6  
C) 19      D) 23

24) Find  $UV$



- A) 6      B) 24  
C) 10      D) 16